

The Human Digestive System- Lab

Histology of the GI Tract


Wall of Small Intestine Mucosa (pg. 524c or 529b)

Label, Color Code to Slide Structure



Slide (stomach or small intestine):

Label and Color Code to Book Structure



X_____

Self- Test A


1. _____
2. _____
3. _____
4. _____
5. _____

Anatomy of the Digestive System


Sagittal Section of Head (pg. 519b): Diagram, Color, Label



Major Regions of the Stomach (pg. 524a): Diagram, Color, Label



Major Organs of Digestion (pg. 516): Diagram, Color, Label



Self Test B

6. _____
7. _____
8. _____
9. _____
10. _____
11. _____
12. _____
13. _____
14. _____
15. _____

Self Quiz C (write out)

16. pancreas: _____

17. pylorus: _____

18. duodenum: _____

19. cecum: _____

20. lingual frenulum: _____

21. oral vestibule: _____

22. parotid gland: _____

23. common bile duct: _____

24. cardiac sphincter: _____

25. mucosa: _____

26. serosa: _____

27. greater omentum: _____

28. gall bladder: _____

29. falciform ligament: _____

30. sigmoid colon: _____